

GCSE Maths – Geometry and Measures

Properties of Circles

Worksheet

NOTES



SOLUTIONS



This worksheet will show you how to work out questions related to properties of circles. Each section contains a **worked example**, a **question with hints** and then **questions for you to work through** on your own.


This work by [PMT Education](https://www.pmt.education) is licensed under [CC BY-NC-ND 4.0](https://creativecommons.org/licenses/by-nc-nd/4.0/)



Section A

Worked Example

Draw a chord on the circle.

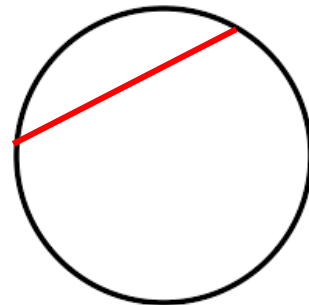


Step 1: Give the meaning of a chord.

A chord is a straight line joining two points on the circumference.


Step 2: Use the definition to accurately draw the chord.

*Mark two points of the circumference of the circle.
Join the two points to create a chord.*




Guided Example

Draw a diameter on this circle



Step 1: Give the meaning of a diameter.


Step 2: Use the definition to accurately draw the diameter.



Now it's your turn!

If you get stuck, look back at the worked and guided examples.

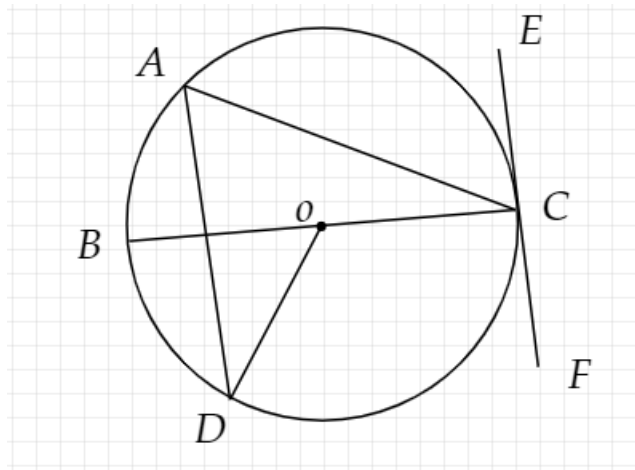
1. A circle is shown below.



- a) Draw a radius on this circle.
- b) The radius of a circle is 6.8 cm. What is the length of the diameter?
- c) The diameter of a circle is 28 cm. What is the length of the radius?
- d) The diameter of a circle is 3.4 cm. Calculate the circumference of the circle to 1 decimal place.



2. Consider the following diagram.



Define the following:

- a) AC
- b) AD
- c) OC
- d) BC
- e) OD
- f) EF


3. A circle has diameter 10 cm. Taking $\pi = 3$, find the perimeter of the circle.




4. A circle has radius 3.5 cm. Taking $\pi = 3.14$, find the perimeter of the circle.
5. A circle has perimeter 12 cm. Taking $\pi = 3$, find the radius of the circle.
6. A circle has perimeter $(3x + 21)$ cm. Taking $\pi = 3$, find the radius of the circle in terms of x .



7. A sector of a circle with arc length 3 cm is cut out of the circle. If the radius is 5 cm, find the perimeter of the shape to the nearest centimetre.



8. The perimeter of a circle is 24 cm. A sector is cut out with arc length 3 cm. What is the perimeter of the sector?



9. The radius of this shape is 3 cm. What is the perimeter of the shape?

